

AZAAN INTERNATIONAL SCHOOL

Grade - I

Activity Sheet-V

Subject-MATHS

Name: _____ Class: _____ Sec: _____

CHAPTER NO: 5. ADDITION

I. Fill in the blanks.

1. Augend is the _____ number in addition. (First / third)
2. When 4 beads are added to a set of 7 beads, the number of beads _____.
(Decreases / increases)
3. Ria has 5 toffees. Her brother has 4 toffees. They both have _____ toffees in all. (ten / nine)

II. Solve the following.

1. $10 + 2 =$ _____
2. $4 + 0 =$ _____
3. $1 + 5 =$ _____
4. $12 + 6 =$ _____
5. $0 + 9 =$ _____
6. $18 + 2 =$ _____

III. Solve by drawing shapes, slanting lines and dots.

- a. There are 8 big fishes and 5 small fishes in a pond. How many fishes are there altogether?



$$\square + \square = \square$$

- b. Ali has 6 red roses and 7 white roses. How many roses does he have in all?



$$\square + \square = \square$$

- c. There are 12 goats and 4 horses in a farm. How many animals are there in the farm altogether?



$$\square + \square = \square$$

IV. Circle the correct number equation that matches the picture.



- a. $2 + 4 = 6$ b. $3 + 4 = 7$ c. $4 + 4 = 8$



- a. $4 + 3 = 7$ b. $5 + 4 = 9$ c. $5 + 3 = 8$

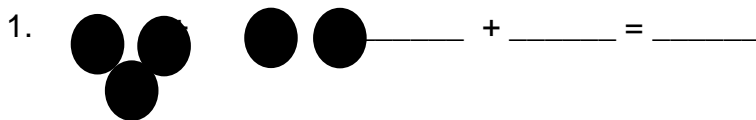


- a. $2 + 5 = 7$ b. $2 + 4 = 6$ c. $2 + 6 = 8$





- a. $4 + 5 = 9$ b. $4 + 3 = 7$ c. $5 + 5 = 10$

V. Count the shapes. Write the numbers and find the sum.



4.   + _____ = _____

VI. Look at the pictures. Write addition story and solve the sum in two different ways.



ADDITION STORY: _____

a. Apples

+

Mangoes

Fruits =

b. Mangoes

+

Apples

Fruits =